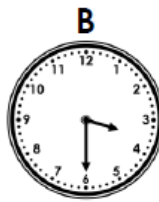


24-hour Clock

1a. Match the analogue clocks to the 24-hour clocks which show the same time.



C
03:30

D
18:45



VF

24-hour Clock

1b. Match the analogue clocks to the 24-hour clocks which show the same time.



C
22:00

D
11:15



VF

2a. Choose number cards to fill in the 24-hour clocks with two times which match the analogue clock.

7 3
5 6



0 : 1 5

1 : 1 5



VF

2b. Choose number cards to fill in the 24-hour clocks with two times which match the analogue clock.

4 1
9 2



2 : 4 5

0 0 : 5



VF

3a. Which of these times is the earliest?
Which of these times is the latest?



B
22:30

C
08:30



VF

3b. Which of these times is the earliest?
Which of these times is the latest?

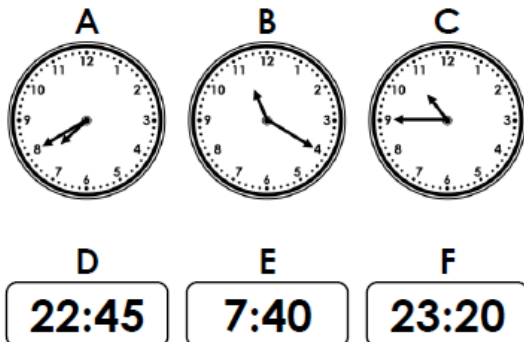
A
10:15



VF

24-hour Clock

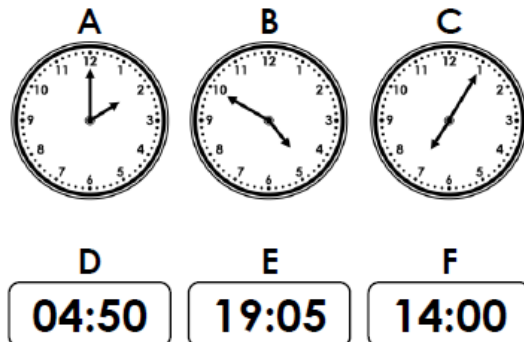
4a. Match the analogue clocks to the 24-hour clocks which show the same time.



VF


24-hour Clock

4b. Match the analogue clocks to the 24-hour clocks which show the same time.




VF

5a. Choose number cards to fill in the 24-hour clocks with two times which match the analogue clock.



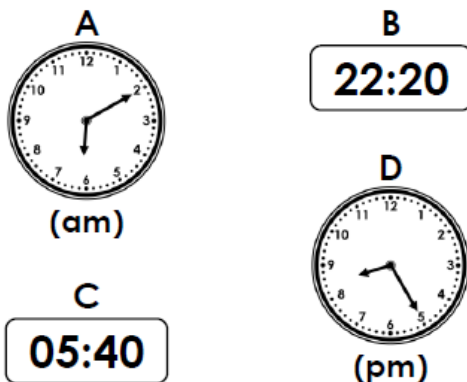
VF

5b. Choose number cards to fill in the 24-hour clocks with two times which match the analogue clock.



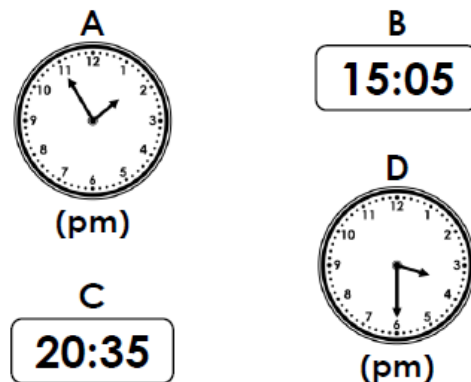
VF

6a. Which of these times is the earliest? Which of these times is the latest?



VF

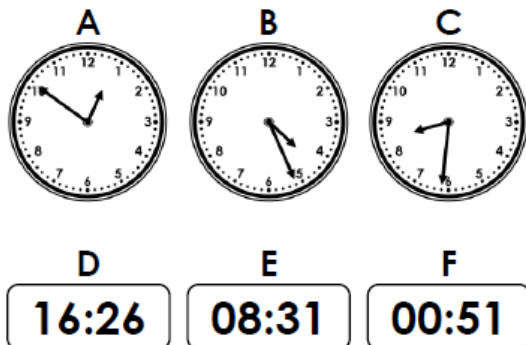
6b. Which of these times is the earliest? Which of these times is the latest?



VF

24-hour Clock

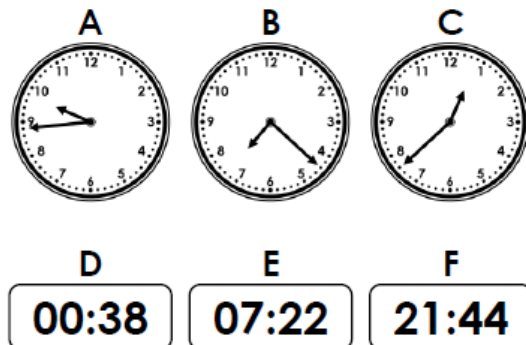
7a. Match the analogue clocks to the 24-hour clocks which show the same time.



VF

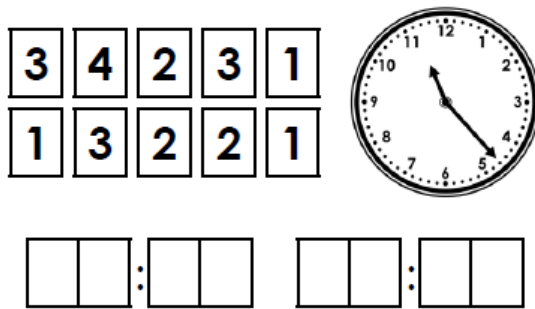
24-hour Clock

7b. Match the analogue clocks to the 24-hour clocks which show the same time.




VF

8a. Choose number cards to fill in the 24-hour clocks with two times which match the analogue clock.



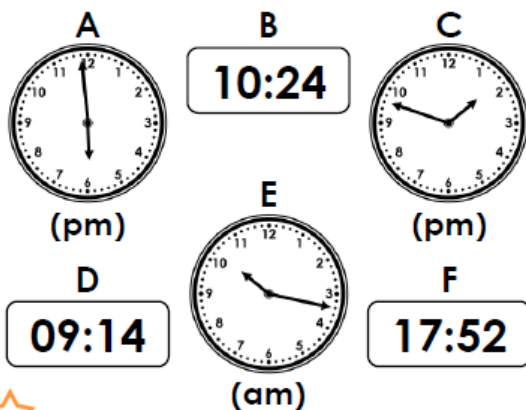
VF

8b. Choose number cards to fill in the 24-hour clocks with two times which match the analogue clock.



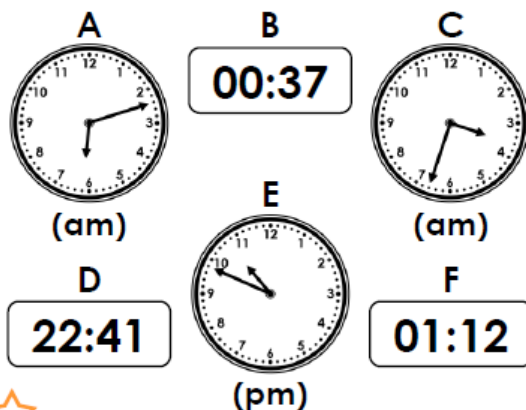
VF

9a. Which of these times is the earliest? Which of these times is the latest?



VF

9b. Which of these times is the earliest? Which of these times is the latest?



VF

Varied Fluency
24-hour Clock

Developing

- 1a. A matches with D. B matches with C.
2a. 05:15, 17:15
3a. A is earliest. B is latest.

Expected

- 4a. A matches with E. B matches with F. C matches with D.
5a. 02:15, 14:15
6a. C is earliest. B is latest.

Greater Depth

- 7a. A matches with F. B matches with D. C matches with E.
8a. 11:23, 23:23
9a. D is earliest. A is latest.

Varied Fluency
24-hour Clock

Developing

- 1b. A matches with C. B matches with D.
2b. 12:45, 00:45
3b. B is earliest. A is latest.

Expected

- 4b. A matches with F. B matches with D. C matches with E.
5b. 21:35, 09:35
6b. A is earliest. C is latest.

Greater Depth

- 7b. A matches with F. B matches with E. C matches with D.
8b. 02:16, 14:16
9b. B is earliest. E is latest.