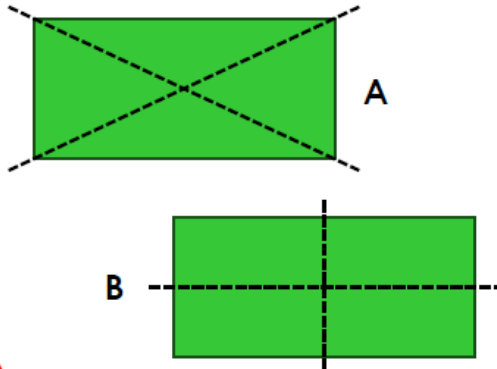


Lines of Symmetry

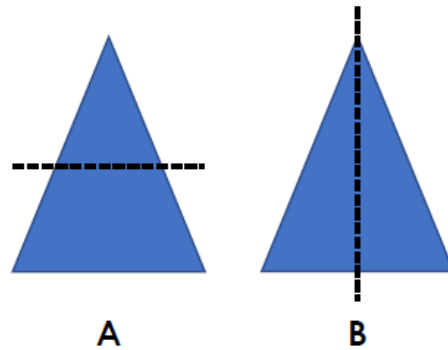
1a. Which shape has the correct lines of symmetry marked?



VF

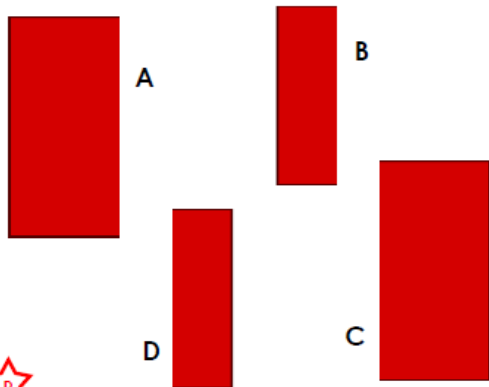
Lines of Symmetry

1b. Which shape has the correct lines of symmetry marked?



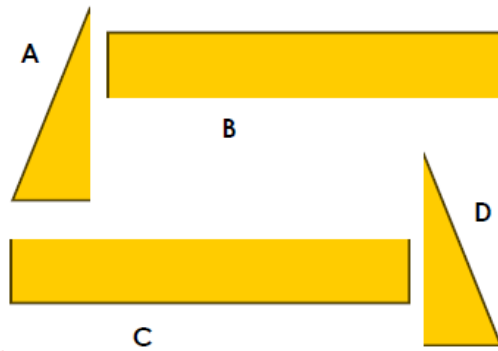
VF

2a. Match the halves that go together to make symmetrical shapes.



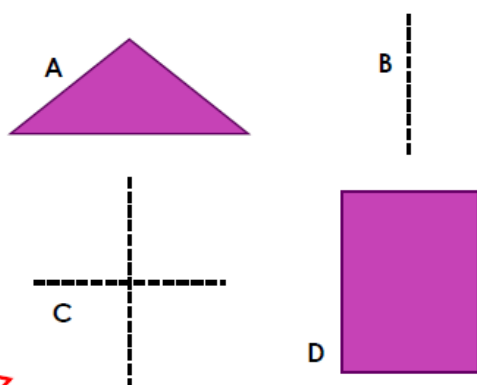
VF

2b. Match the halves that go together to make symmetrical shapes.



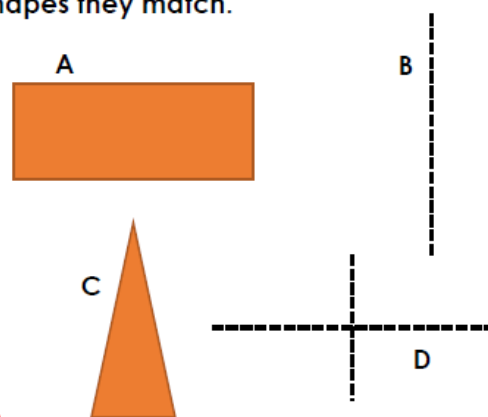
VF

3a. Pair the lines of symmetry with the shapes they match.



VF

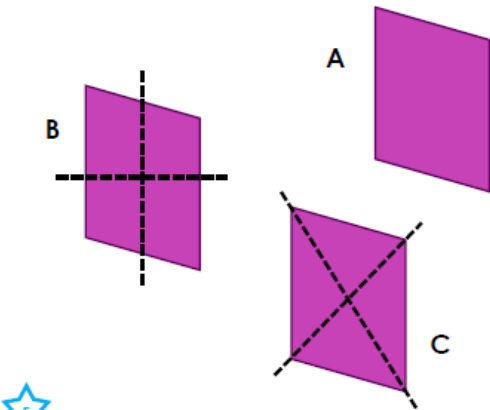
3b. Pair the lines of symmetry with the shapes they match.



VF

Lines of Symmetry

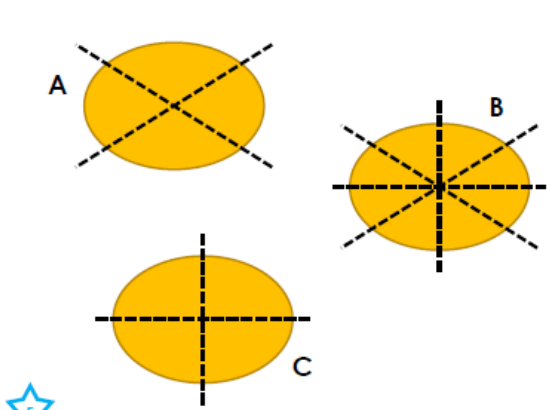
4a. Which shape has the correct lines of symmetry marked?



VF

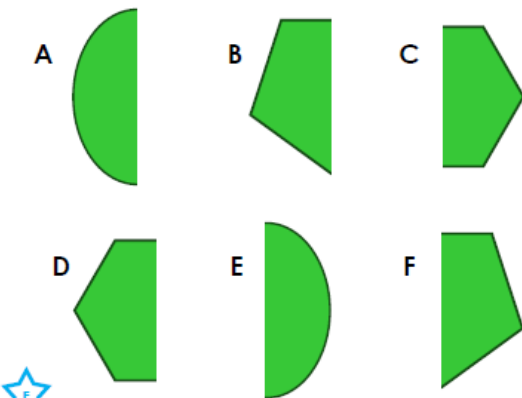
Lines of Symmetry

4b. Which shape has the correct lines of symmetry marked?



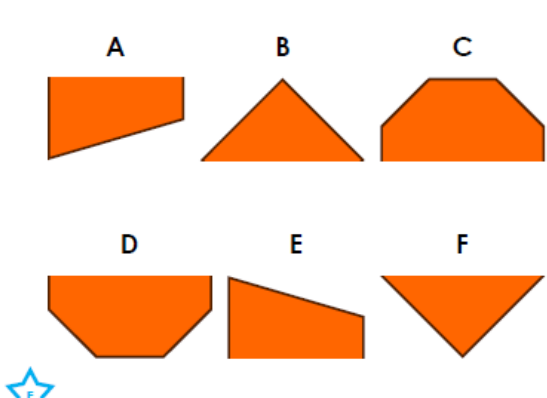
VF

5a. Match the halves that go together to make symmetrical shapes.



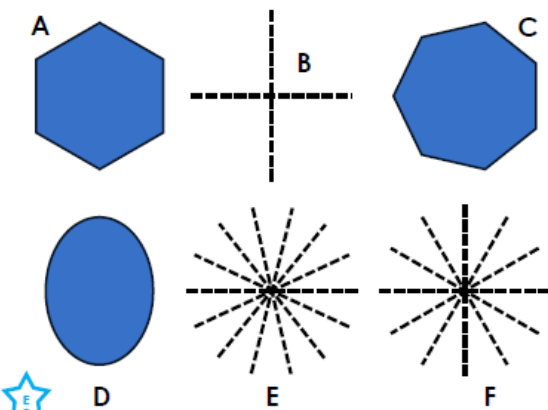
VF

5b. Match the halves that go together to make symmetrical shapes.



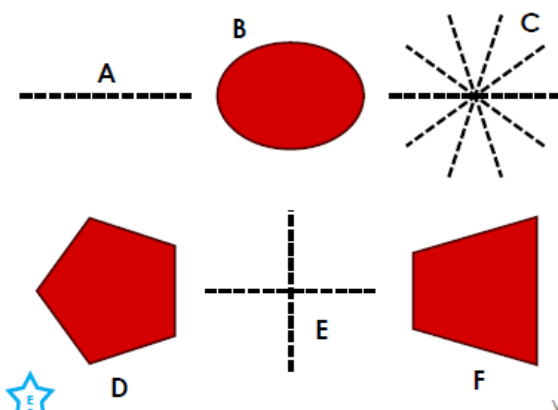
VF

6a. Pair the lines of symmetry with the shapes they match.



VF

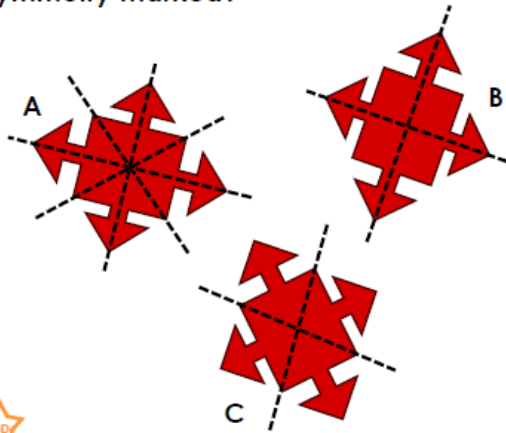
6b. Pair the lines of symmetry with the shapes they match.



VF

Lines of Symmetry

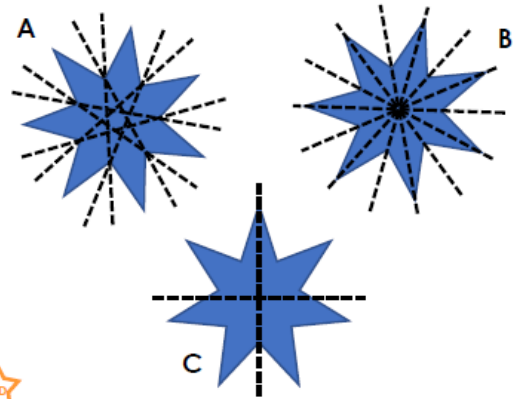
7a. Which shape has the correct lines of symmetry marked?



VF

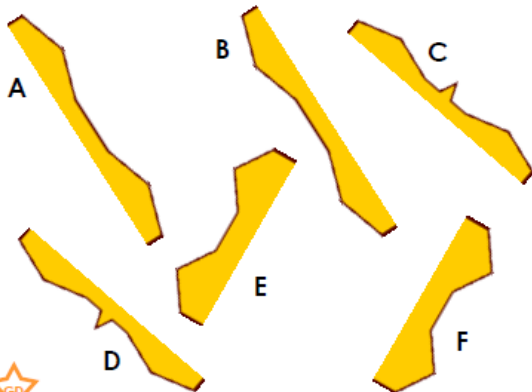
Lines of Symmetry

7b. Which shape has the correct lines of symmetry marked?



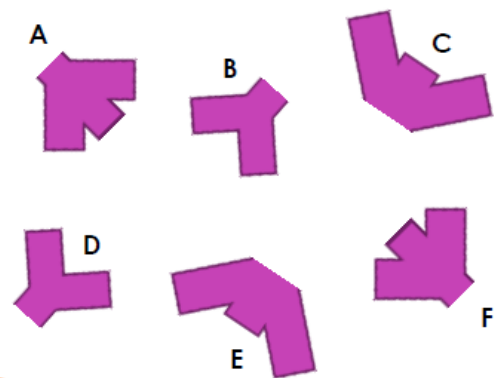
VF

8a. Match the halves that go together to make symmetrical shapes.



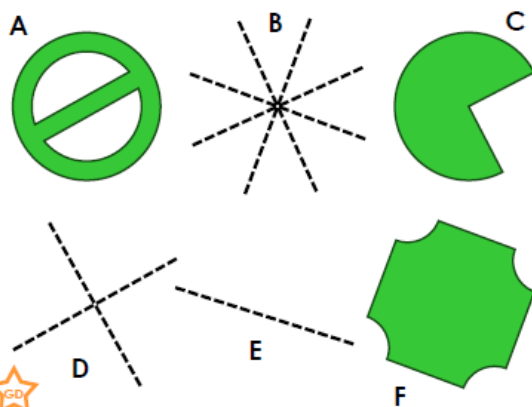
VF

8b. Match the halves that go together to make symmetrical shapes.



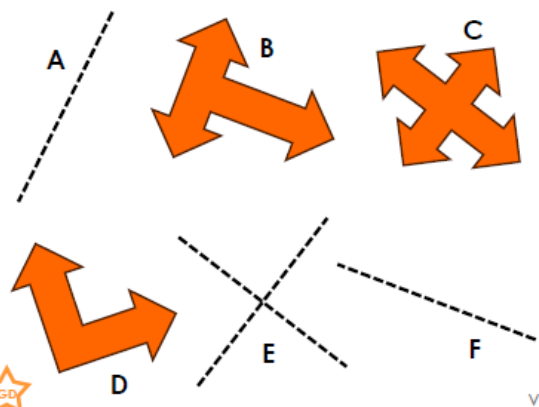
VF

9a. Pair the lines of symmetry with the shapes they match.



VF

9b. Pair the lines of symmetry with the shapes they match.



VF

Varied Fluency
Lines of Symmetry

Developing

- 1a. Shape B
- 2a. A and C; B and D
- 3a. A and B; C and D

Expected

- 4a. Shape A
- 5a. A and E; B and F; C and D
- 6a. A and F; B and D; C and E

Greater Depth

- 7a. Shape A
- 8a. A and B; C and D; E and F
- 9a. A and D; B and F; C and E

Varied Fluency
Lines of Symmetry

Developing

- 1b. Shape B
- 2b. A and D; B and C
- 3b. A and D; B and C

Expected

- 4b. Shape C
- 5b. A and E; B and F; C and D
- 6b. A and F; B and E; C and D

Greater Depth

- 7b. Shape B
- 8b. A and F; B and D; C and E
- 9b. A and D; B and F; C and E