


Telling the Time to 5 Minutes

1a. What time is shown on the clock?



VF

1b. What time is shown on the clock?



VF

2a. A clock shows the time five minutes past eleven.

What number is the minute hand pointing at?

5

1



VF

2b. A clock shows the time twenty-five minutes to eight.

What number is the minute hand pointing at?

8

7



VF

3a. Draw the missing hand on the clock so that it reads twenty minutes past eight.




VF

3b. Draw the missing hand on the clock so that it reads quarter past four.




VF

4a. Draw hands on the clock so that it reads twenty-five minutes past six.



VF

4b. Draw hands on the clock so that it reads twenty minutes to eight.



VF

Telling the Time to 5 Minutes

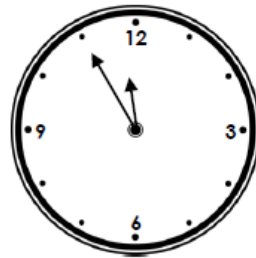
Telling the Time to 5 Minutes

5a. What time is shown on the clock?



VF

5b. What time is shown on the clock?



VF

6a. A clock shows the time twenty-five minutes to three.

What number is the minute hand pointing at?

VII

II

VI



VF

6b. A clock shows the time quarter to one.

What number is the minute hand pointing at?

XII

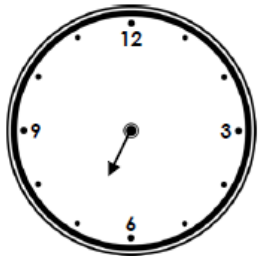
XI

IX




VF

7a. Draw the missing hand on the clock so that it reads twenty minutes to seven.



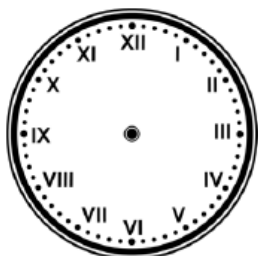
VF

7b. Draw the missing hand on the clock so that it reads ten minutes to two.



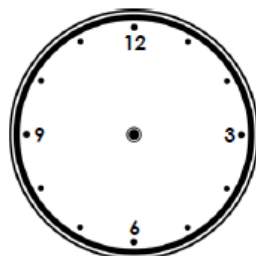
VF

8a. Draw hands on the clock so that it reads five minutes to ten.



VF

8b. Draw hands on the clock so that it reads twenty minutes past nine.

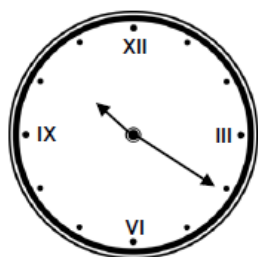


VF

Telling the Time to 5 Minutes

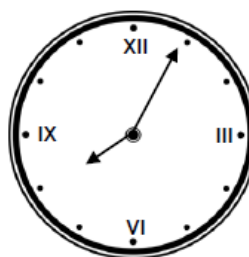
Telling the Time to 5 Minutes

9a. What time is shown on the clock?



VF

9b. What time is shown on the clock?



VF

10a. A clock shows the time five minutes to eight.

What number is the minute hand pointing at?

VII

XI

IX

VIII



VF

10b. A clock shows the time twenty-five minutes past eleven.

What number is the minute hand pointing at?

XI

IV

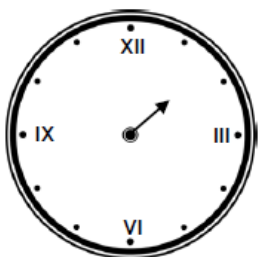
V

VII



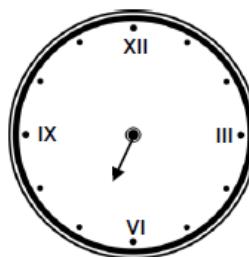
VF

11a. Draw the missing hand on the clock so that it reads ten minutes to two.



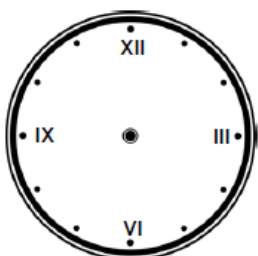
VF

11b. Draw the missing hand on the clock so that it reads twenty minutes to seven.



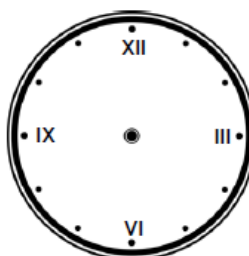
VF

12a. Draw hands on the clock so that it reads twenty minutes past eight.



VF

12b. Draw hands on the clock so that it reads twenty-five minutes past five.



VF

Varied Fluency
Telling the Time to 5 Minutes

Developing

1a. Quarter past 1 or 15 minutes past 1.

2a. 1

3a.



4a.



Expected

5a. 25 minutes past 2

6a. VII

7a.



8a.

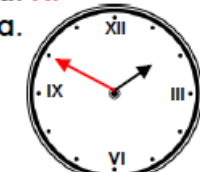


Greater Depth

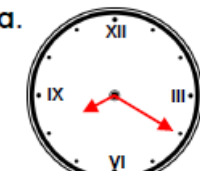
9a. 20 minutes past 10

10a. XI

11a.



12a.



Varied Fluency
Telling the Time to 5 Minute

Developing

1b. 25 minutes to 12

2b. 7

3b.



4b.



Expected

5b. 5 minutes to 12

6b. IX

7b.



8b.

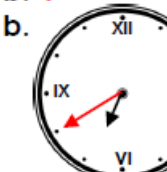


Greater Depth

9b. 5 minutes past 8

10b. V

11b.



12b.

