

Mental Maths Test Friday 5<sup>th</sup>  
June

- ***5 Seconds to answer each question.***

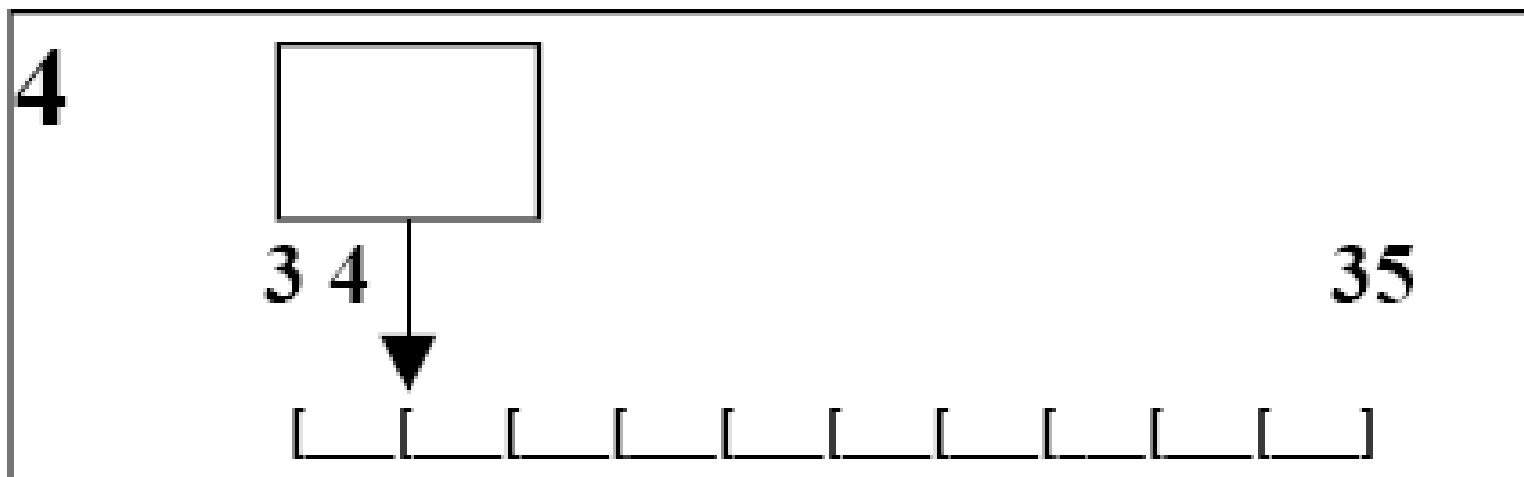
- 1. Write the number six thousand, two hundred and thirty in figures.

- 2. Look at the number sentence on your sheet. Write the correct value in the missing box.

$$\underline{\hspace{2cm}} + 11 = 56$$

- 3. Multiply eighty three by ten.

- 4. On your answer sheet is a scale. What is the number shown by the arrow?



- 5. It is 127 miles from London to Birmingham. Round this distance to the nearest ten miles.

- **10 Seconds to answer each question.**

- 6. Look at the numbers on your answer sheet. Write the number which is exactly divisible by five.

51      15      52      53

- 7. Write down the largest of the five numbers on your sheet.

- 706      192      607      167      617

- 8. What fraction of one pound is thirty pence?

- 9. What is 10% of £2?

- 10. What is fifty two subtract forty seven?

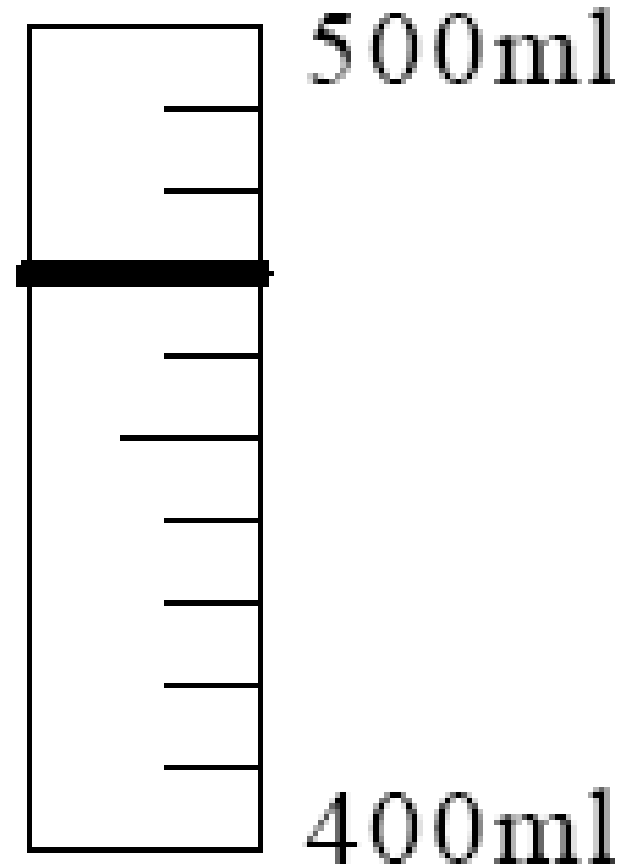
- 11. Look at the number sequence on your sheet. Which number is missing from the empty box?

24, 32, 40,  , 56

- 12. What is 62 minus 7?

- 13. What is half of 86?

- 14. Look at the scale on your answer sheet. How much water is in the measuring cylinder?




- 15. Cans of pop cost 25p. How much would six cans cost?

- **15 Seconds to answer each question.**

- 16. How many seconds are there in 2 minutes?

- 17. Look at the drawing on your answer sheet. Estimate the size of the angle .



- 18. It costs 80p for a child to swim. How much does it cost for 6 children to swim?

- 19. Look at the rectangle on your answer sheet.  
What is the perimeter of the rectangle?



- 20. How many grams are equivalent to 4kg?